

Name: _____


Identify the MAJOR KEY that has the given A4 or d5.



_____ Major.



_____ Major.



_____ Major.



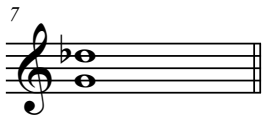
_____ Major.



_____ Major.




_____ Major.




_____ Major.



_____ Major.



_____ Major.



_____ Major.